

Please check the examination details below before entering your candidate information

Candidate surname

Other names

Centre Number

Candidate Number

**Pearson Edexcel**  
**Level 1/Level 2 GCSE (9–1)**

--	--	--	--	--

--	--	--	--	--

**Tuesday 5 November 2019**

Morning (Time: 1 hour 30 minutes)

Paper Reference **1MA1/1H**

**Mathematics**

**Paper 1 (Non-Calculator)**  
**Higher Tier**

**You must have:** Ruler graduated in centimetres and millimetres,  
protractor, pair of compasses, pen, HB pencil, eraser.  
Tracing paper may be used.

Total Marks

### Instructions

- Use **black** ink or ball-point pen.
- **Fill in the boxes** at the top of this page with your name, centre number and candidate number.
- Answer **all** questions.
- Answer the questions in the spaces provided  
– *there may be more space than you need.*
- You must **show all your working**.
- Diagrams are **NOT** accurately drawn, unless otherwise indicated.
- **Calculators may not be used.**



### Information

- The total mark for this paper is 80
- The marks for **each** question are shown in brackets  
– *use this as a guide as to how much time to spend on each question.*

### Advice

- Read each question carefully before you start to answer it.
- Keep an eye on the time.
- Try to answer every question.
- Check your answers if you have time at the end.

Turn over ►

P58866A

©2019 Pearson Education Ltd.

6/1/1/



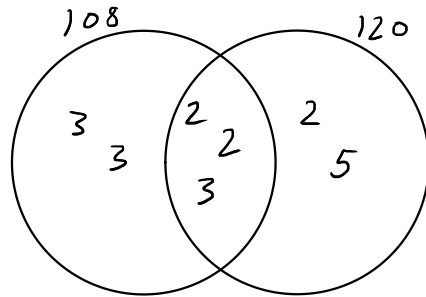
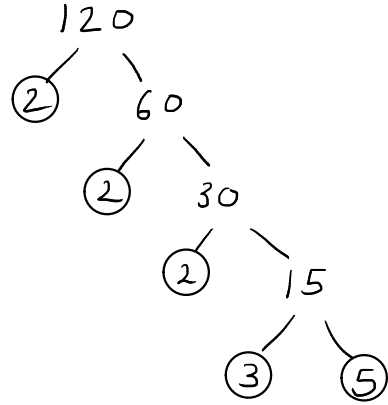
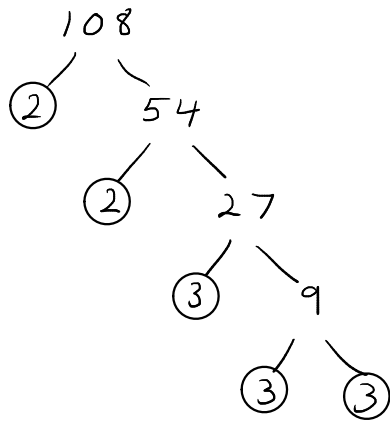
  
**Pearson**

Answer ALL questions.

Write your answers in the spaces provided.

You must write down all the stages in your working.

1 Find the Lowest Common Multiple (LCM) of 108 and 120



$$\begin{aligned} \text{LCM} &= 108 \times 2 \times 5 \\ &= 1080 \end{aligned}$$

1080

(Total for Question 1 is 3 marks)

DO NOT WRITE IN THIS AREA

DO NOT WRITE IN THIS AREA

DO NOT WRITE IN THIS AREA



DO NOT WRITE IN THIS AREA

DO NOT WRITE IN THIS AREA

DO NOT WRITE IN THIS AREA

2 There are 60 people in a choir.

Half of the people in the choir are women. 30 [60 ÷ 2]

The number of women in the choir is 3 times the number of men in the choir. 10 [30 ÷ 3]

The rest of the people in the choir are children. 20 [60 - 30 - 10]

the number of children in the choir : the number of men in the choir =  $n : 1$

Work out the value of  $n$ .

You must show how you get your answer.

$$20 : 10$$
$$2 : 1$$

$$n = \dots\dots\dots 2 \dots\dots\dots$$

(Total for Question 2 is 4 marks)

3 Work out  $1\frac{3}{4} \times 1\frac{1}{3}$

Give your answer as a mixed number.

$$1\frac{3}{4} = \frac{7}{4}$$

$$1\frac{1}{3} = \frac{4}{3}$$

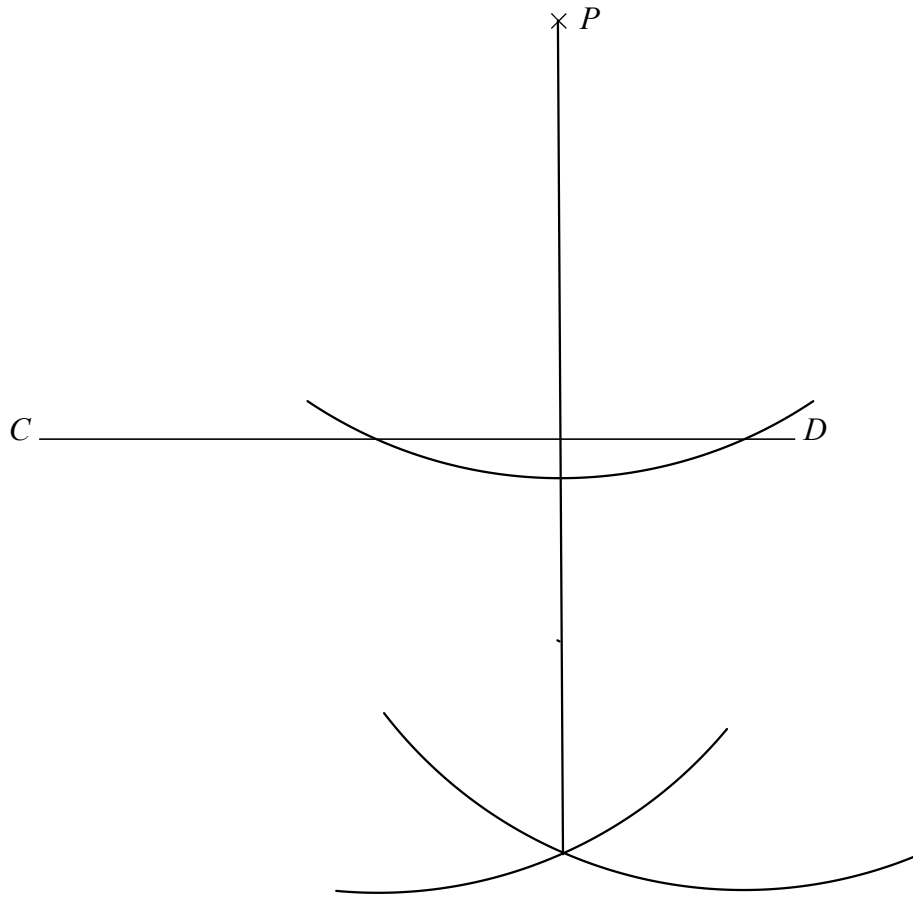
$$\frac{7}{4} \times \frac{4}{3} = \frac{7}{3}$$
$$= 2\frac{1}{3}$$

$$\dots\dots\dots 2\frac{1}{3} \dots\dots\dots$$

(Total for Question 3 is 3 marks)



- 4 Use a ruler and compasses to construct the line from the point  $P$  perpendicular to the line  $CD$ . You must show **all** construction lines.



(Total for Question 4 is 2 marks)

DO NOT WRITE IN THIS AREA

DO NOT WRITE IN THIS AREA

DO NOT WRITE IN THIS AREA

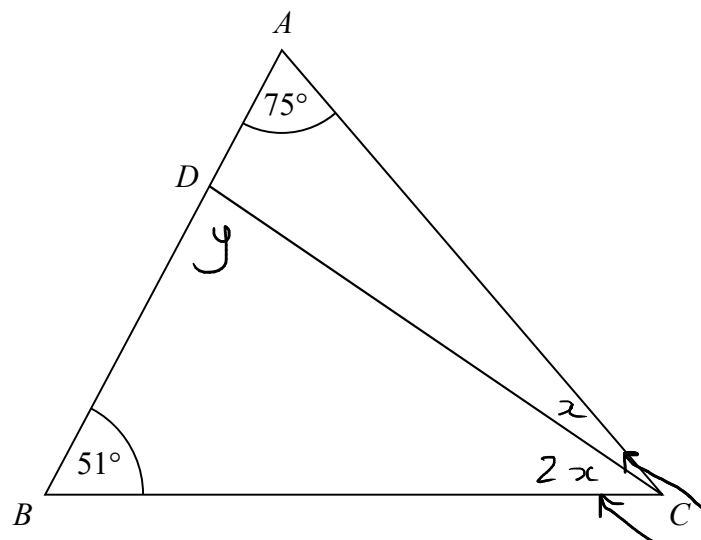


DO NOT WRITE IN THIS AREA

DO NOT WRITE IN THIS AREA

DO NOT WRITE IN THIS AREA

5 The diagram shows triangle  $ABC$ .



$ADB$  is a straight line.

the size of angle  $DCB$  : the size of angle  $ACD = 2 : 1$

Work out the size of angle  $BDC$ .

Triangle  $ABC$  :  $51 + 75 + 3x = 180$   
 $126 + 3x = 180$   
 $3x = 54$   
 $x = 18$   
 $2x = 36$

Triangle  $BCD$  :  $51 + 36 + y = 180$   
 $87 + y = 180$   
 $y = \underline{\underline{93}}$

..... 93 °

(Total for Question 5 is 4 marks)



- 6 4 red bricks have a mean weight of 5 kg.  $4 \times 5 = 20 \text{ kg}$   
5 blue bricks have a mean weight of 9 kg.  $5 \times 9 = 45 \text{ kg}$   
1 green brick has a weight of 6 kg.  $6 \text{ kg}$

Donna says,

“The mean weight of the 10 bricks is less than 7 kg.”

Is Donna correct?

You must show how you get your answer.

$$\begin{aligned} \text{Total} &= 20 + 45 + 6 \\ &= 71 \text{ kg} \end{aligned}$$

$$\text{Mean} = \frac{71}{10} = 7.1 \text{ kg}$$

No. The mean is 7.1 kg.

(Total for Question 6 is 3 marks)

DO NOT WRITE IN THIS AREA

DO NOT WRITE IN THIS AREA

DO NOT WRITE IN THIS AREA



DO NOT WRITE IN THIS AREA

DO NOT WRITE IN THIS AREA

DO NOT WRITE IN THIS AREA

7 (a) Simplify  $(p^2)^5$

$$\frac{p^{10}}{(1)}$$

(b) Simplify  $12x^7y^3 \div 6x^3y$

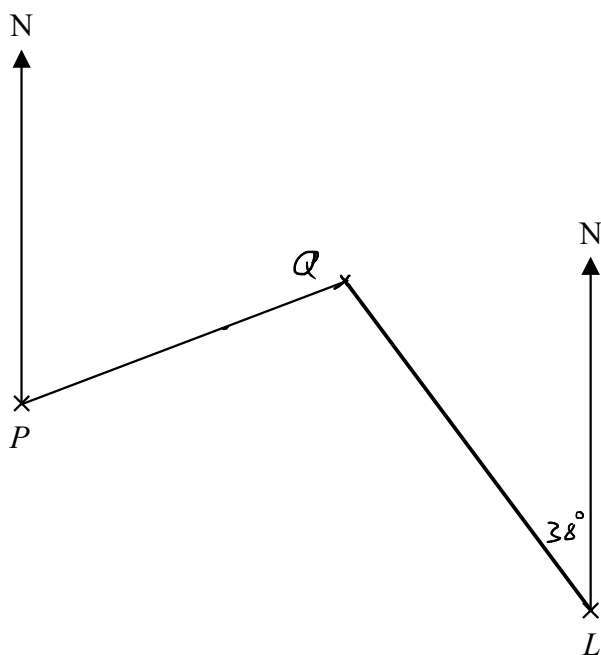
$$\frac{12x^7y^3}{6x^3y}$$

$$\frac{2x^4y^2}{(2)}$$

(Total for Question 7 is 3 marks)



- 8 The accurate scale drawing shows the positions of port  $P$  and a lighthouse  $L$ .



Scale: 1 cm represents 4 km.

Aleena sails her boat from port  $P$  on a bearing of  $070^\circ$

She sails for  $1\frac{1}{2}$  hours at an average speed of 12 km/h to a port  $Q$ .

Find

- the distance, in km, of port  $Q$  from lighthouse  $L$ ,
- the bearing of port  $Q$  from lighthouse  $L$ .

$$\begin{aligned} \text{Distance } PQ &= 1.5 \times 12 \\ &= 18 \text{ km} \end{aligned}$$

$$\frac{18}{4} = \frac{9}{2} = 4.5 \text{ cm}$$

i) Distance  $QL$       5.5 cm (measure with a ruler)

$$5.5 \times 4 = 22 \text{ km}$$

ii) Bearing of  $Q$  from  $L$

$$360 - 38 = 322^\circ$$

distance  $QL = \dots\dots\dots 22 \dots\dots\dots$  km

bearing of  $Q$  from  $L = \dots\dots\dots 322 \dots\dots\dots^\circ$

(Total for Question 8 is 5 marks)





DO NOT WRITE IN THIS AREA

DO NOT WRITE IN THIS AREA

DO NOT WRITE IN THIS AREA

9 A car travels for 18 minutes at an average speed of 72 km/h.

(a) How far will the car travel in these 18 minutes?

$$18 \text{ mins} = \frac{18}{60} \text{ hours}$$

$$\text{distance} = \text{speed} \times \text{time}$$

$$= 72 \times \frac{18}{60}$$

$$= 21.6 \text{ km}$$

$$\underline{\hspace{1cm} 21.6 \hspace{1cm}} \text{ km} \\ (2)$$

David says,

“72 kilometres per hour is faster than 20 metres per second.”

(b) Is David correct?

You must show how you get your answer.

$$72 \text{ km/hr}$$

$$72000 \text{ m/hr}$$

$$\div 60$$

$$1200 \text{ m/min}$$

$$\div 60$$

$$20 \text{ m/s}$$

$$\text{No } 72 \text{ km/hr} = 20 \text{ m/s} \\ (2)$$

(Total for Question 9 is 4 marks)

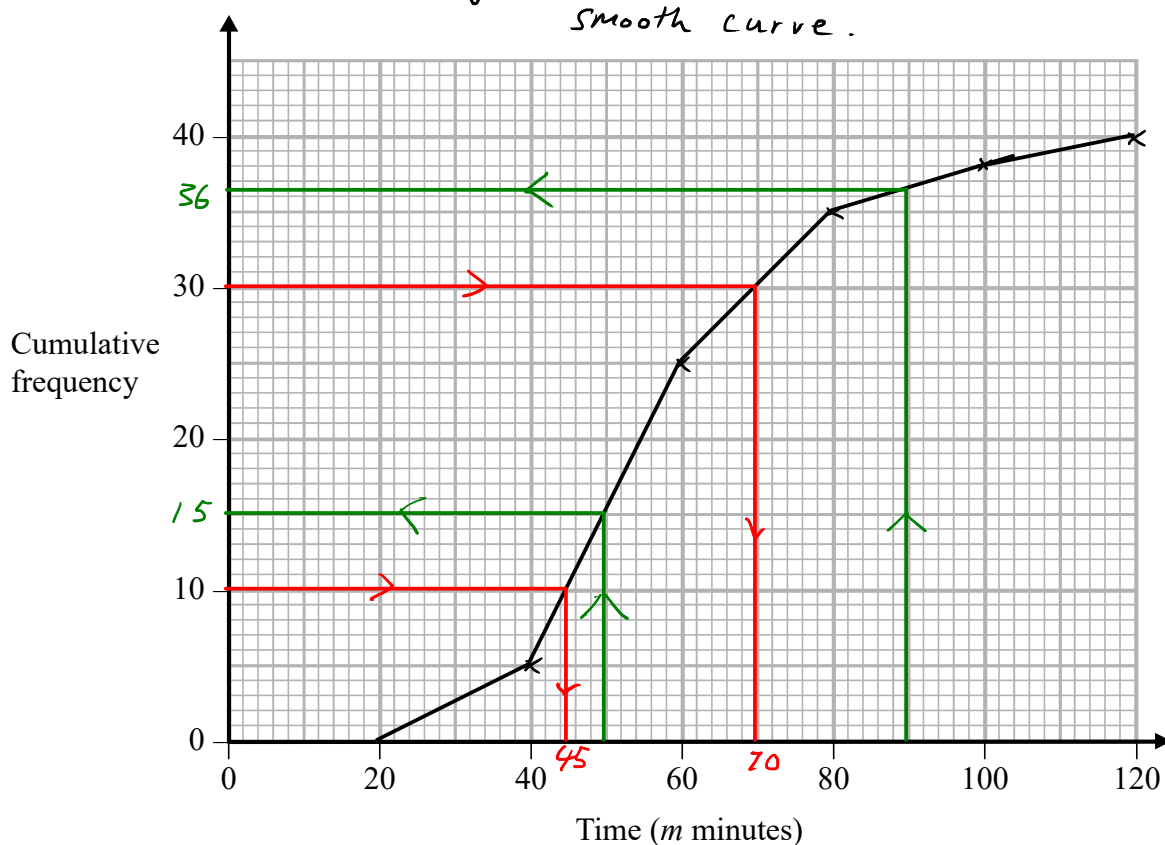


- 10 The cumulative frequency table shows information about the times, in minutes, taken by 40 people to complete a puzzle.

Time ( $m$ minutes)	Cumulative frequency
$20 < m \leq 40$	5
$20 < m \leq 60$	25
$20 < m \leq 80$	35
$20 < m \leq 100$	38
$20 < m \leq 120$	40

- (a) On the grid below, draw a cumulative frequency graph for this information.

*Join with straight lines or a smooth curve.*



(2)



(b) Use your graph to find an estimate for the interquartile range.

$$70 - 45$$

..... 25 ..... minutes  
(2)

One of the 40 people is chosen at random.

(c) Use your graph to find an estimate for the probability that this person took between 50 minutes and 90 minutes to complete the puzzle.

$$36 - 15$$

.....  $\frac{21}{40}$  .....  
(2)

(Total for Question 10 is 6 marks)



- 11 There are  $p$  counters in a bag.  
12 of the counters are yellow.

Shafiq takes at random 30 counters from the bag.  
5 of these 30 counters are yellow.

Work out an estimate for the value of  $p$ .

$$\frac{12}{p} = \frac{5}{30}$$

$$\frac{12}{p} = \frac{1}{6}$$

$$6 \times 12 = p$$

72

(Total for Question 11 is 2 marks)

12  $T = \frac{q}{2} + 5$

Here is Spencer's method to make  $q$  the subject of the formula.

$$2 \times T = q + 5$$

$$q = 2T - 5$$

$$2T = q + 10$$

$$q = 2T - 10$$

What mistake did Spencer make in the first line of his method?

He did not multiply all of the terms by 2  
It should be  $2T = q + 10$

(Total for Question 12 is 1 mark)

or// He should take 5 from both sides  
before multiplying by 2

$$T - 5 = \frac{q}{2}$$

$$2(T - 5) = q$$

$$2T - 10 = q$$



DO NOT WRITE IN THIS AREA

DO NOT WRITE IN THIS AREA

DO NOT WRITE IN THIS AREA

13 (a) Write  $\frac{5}{x+1} + \frac{2}{3x}$  as a single fraction in its simplest form.

$$\frac{5(3x)}{3x(x+1)} + \frac{2(x+1)}{3x(x+1)}$$

$$\frac{5(3x) + 2(x+1)}{3x(x+1)}$$

$$\frac{15x + 2x + 2}{3x(x+1)}$$

$$\frac{17x + 2}{3x(x+1)}$$

(2)

(b) Factorise  $(x+y)^2 + 3(x+y)$

$$x+y(x+y+3)$$

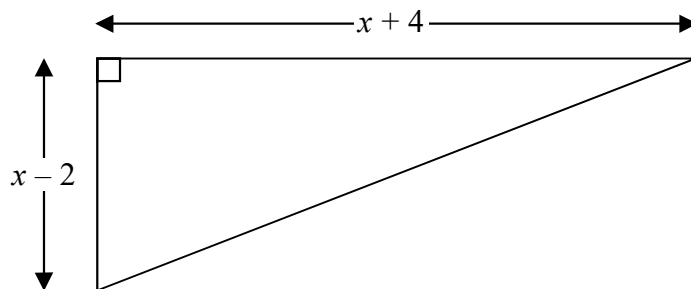
$$(x+y)(x+y+3)$$

(1)

(Total for Question 13 is 3 marks)



14 The diagram shows a right-angled triangle.



All the measurements are in centimetres.

The area of the triangle is  $27.5 \text{ cm}^2$

Work out the length of the shortest side of the triangle.  
You must show all your working.

$$\frac{1}{2} (x - 2)(x + 4) = 27.5$$

$$(x - 2)(x + 4) = 55$$

$$x^2 + 4x - 2x - 8 = 55$$

$$x^2 + 2x - 63 = 0$$

$$(x + 9)(x - 7) = 0$$

$$x = -9 \quad x = 7$$

X

$$\begin{aligned} \text{Shortest side} &= 7 - 2 \\ &= 5 \text{ cm} \end{aligned}$$

.....5..... cm

(Total for Question 14 is 4 marks)

DO NOT WRITE IN THIS AREA

DO NOT WRITE IN THIS AREA

DO NOT WRITE IN THIS AREA



DO NOT WRITE IN THIS AREA

- 15 Express  $0.\dot{4}\dot{1}\dot{8}$  as a fraction.  
You must show all your working.

$$\begin{aligned} 0.\dot{4}\dot{1}\dot{8} &= x \\ 4.\dot{1}\dot{8} &= 10x \\ 418.\dot{1}\dot{8} &= 1000x \\ 414 &= 990x \\ x &= \frac{414}{990} \end{aligned}$$

$$\frac{414}{990}$$

(Total for Question 15 is 3 marks)

DO NOT WRITE IN THIS AREA

- 16 (a) Rationalise the denominator of  $\frac{22}{\sqrt{11}}$

Give your answer in its simplest form.

$$\frac{22}{\sqrt{11}} \times \frac{\sqrt{11}}{\sqrt{11}}$$

$$\frac{22\sqrt{11}}{11}$$

$$\frac{2\sqrt{11}}{1}$$

- (b) Show that  $\frac{\sqrt{3}}{2\sqrt{3}-1}$  can be written in the form  $\frac{a+\sqrt{3}}{b}$  where  $a$  and  $b$  are integers.

$$\frac{\sqrt{3}(2\sqrt{3}+1)}{(2\sqrt{3}-1)(2\sqrt{3}+1)}$$

$$\frac{2(3) + \sqrt{3}}{4(3) + 2\sqrt{3} - 2\sqrt{3} - 1}$$

$$\frac{6 + \sqrt{3}}{11}$$

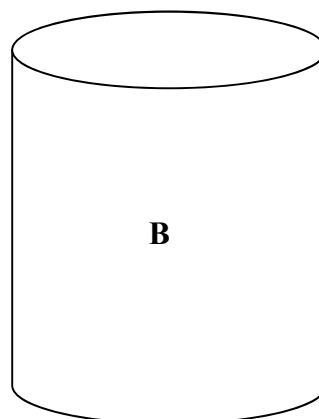
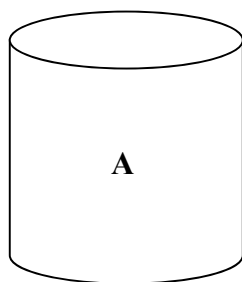
(3)

(Total for Question 16 is 5 marks)

DO NOT WRITE IN THIS AREA



17 **A** and **B** are two similar cylindrical containers.



the surface area of container **A** : the surface area of container **B** = 4 : 9

Tyler fills container **A** with water.

She then pours all the water into container **B**.

Tyler repeats this and stops when container **B** is full of water.

Work out the number of times that Tyler fills container **A** with water.

You must show all your working.

	<i>A</i> : <i>B</i>
surface area	4 : 9
length	2 : 3
volume	8 : 27

$$\frac{27}{8} = 3 \frac{3}{8}$$

she will fill container **A** 4 times

4

(Total for Question 17 is 4 marks)





DO NOT WRITE IN THIS AREA

DO NOT WRITE IN THIS AREA

DO NOT WRITE IN THIS AREA

18 The function  $f$  is given by

$$f(x) = 2x^3 - 4$$

(a) Show that  $f^{-1}(50) = 3$

$$\begin{aligned} 50 &= 2x^3 - 4 \\ 54 &= 2x^3 \\ 27 &= x^3 \\ \underline{\underline{x}} &= \underline{\underline{3}} \end{aligned}$$

(2)

The functions  $g$  and  $h$  are given by

$$g(x) = x + 2 \text{ and } h(x) = x^2$$

(b) Find the values of  $x$  for which

$$hg(x) = 3x^2 + x - 1$$

$$hg(x) = (x+2)^2$$

$$(x+2)^2 = 3x^2 + x - 1$$

$$(x+2)(x+2) = 3x^2 + x - 1$$

$$x^2 + 2x + 2x + 4 = 3x^2 + x - 1$$

$$x^2 + 4x + 4 = 3x^2 + x - 1$$

$$0 = 2x^2 - 3x - 5$$

$$0 = 2x^2 + 2x - 5x - 5$$

$$\begin{array}{r} 10 \\ 1 \quad 10 \\ 2 \quad 5 \end{array}$$

$$0 = (2x - 5)(x + 1)$$

$$x = \frac{5}{2} \quad x = -1$$

$$x = \frac{5}{2} \text{ or } x = -1$$

(4)

(Total for Question 18 is 6 marks)



- 19 Given that  $9^{-\frac{1}{2}} = 27^{\frac{1}{4}} \div 3^{x+1}$   
find the exact value of  $x$ .

$$(3^2)^{-\frac{1}{2}} = (3^3)^{\frac{1}{4}} \div 3^{x+1}$$

$$3^{-1} = \frac{3^{\frac{3}{4}}}{3^{x+1}}$$

$$3^{-1} \times 3^{x+1} = 3^{\frac{3}{4}}$$

$$3^x = 3^{\frac{3}{4}}$$

$$x = \dots\dots\dots \frac{3}{4}$$

(Total for Question 19 is 3 marks)

DO NOT WRITE IN THIS AREA

DO NOT WRITE IN THIS AREA

DO NOT WRITE IN THIS AREA

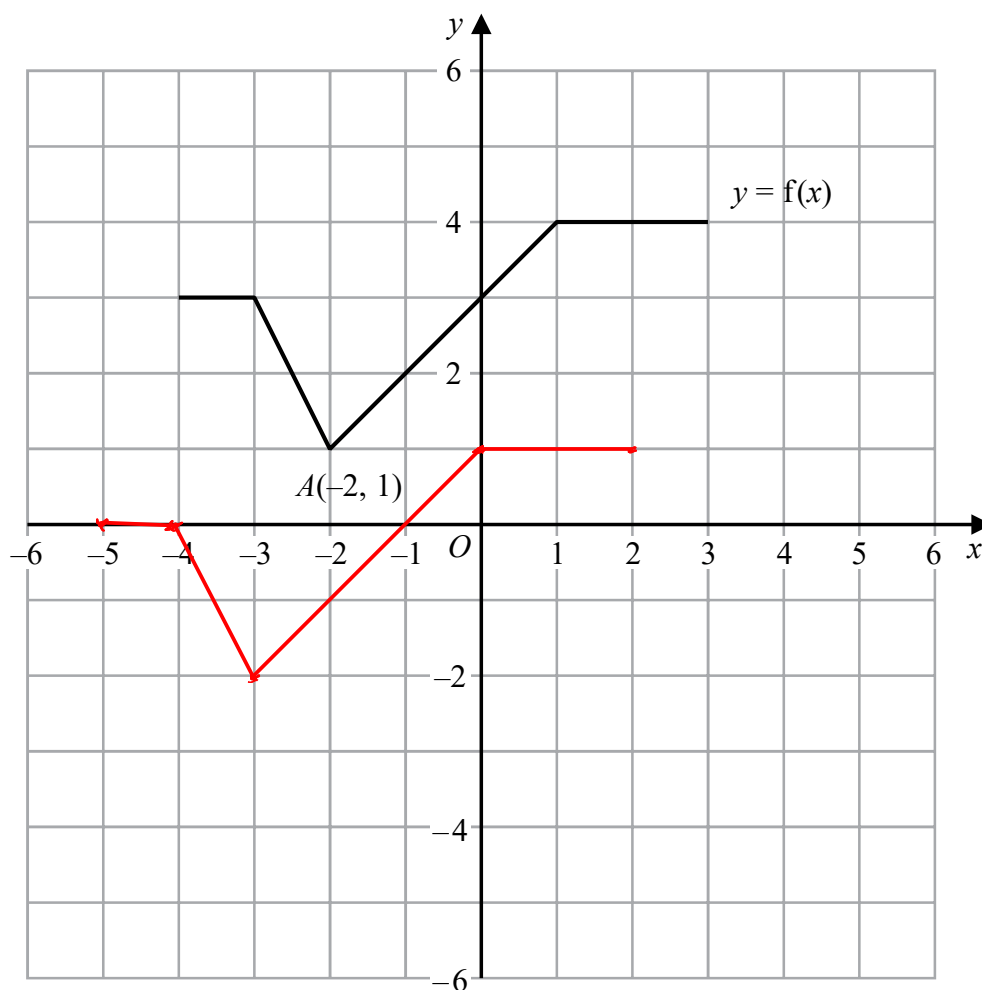


DO NOT WRITE IN THIS AREA

DO NOT WRITE IN THIS AREA

DO NOT WRITE IN THIS AREA

20 The graph of  $y = f(x)$  is shown on the grid.



(a) On the grid, draw the graph with equation  $y = f(x + 1) - 3$

(2)

Point  $A(-2, 1)$  lies on the graph of  $y = f(x)$ .

When the graph of  $y = f(x)$  is transformed to the graph with equation  $y = f(-x)$ , point  $A$  is mapped to point  $B$ .

(b) Write down the coordinates of point  $B$ .

( 2 , 1 )  
(1)

(Total for Question 20 is 3 marks)



21 Sketch the graph of

$$y = 2x^2 - 8x - 5$$

showing the coordinates of the turning point and the exact coordinates of any intercepts with the coordinate axes.

$$\begin{aligned} y &= 2\left(x^2 - 4x - \frac{5}{2}\right) \\ &= 2\left((x-2)^2 - 4 - \frac{5}{2}\right) \\ &= 2\left((x-2)^2 - 6.5\right) \\ &= 2(x-2)^2 - 13 \end{aligned}$$

min point at  $(2, -13)$

crosses  $y$  when  $x=0$   $y = -5$

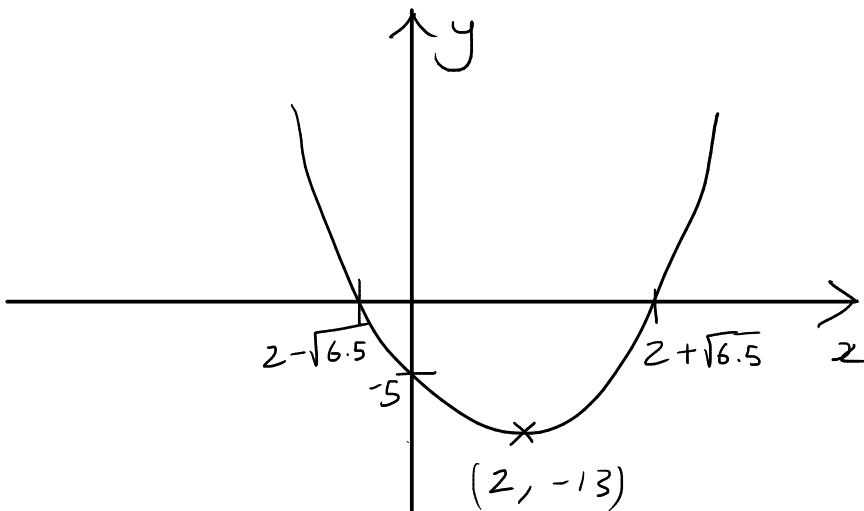
crosses  $x$  when  $y=0$   $2(x-2)^2 - 13 = 0$

$$2(x-2)^2 = 13$$

$$(x-2)^2 = \frac{13}{2}$$

$$x-2 = \pm\sqrt{\frac{13}{2}}$$

$$x = 2 \pm \sqrt{6.5}$$



(Total for Question 21 is 5 marks)

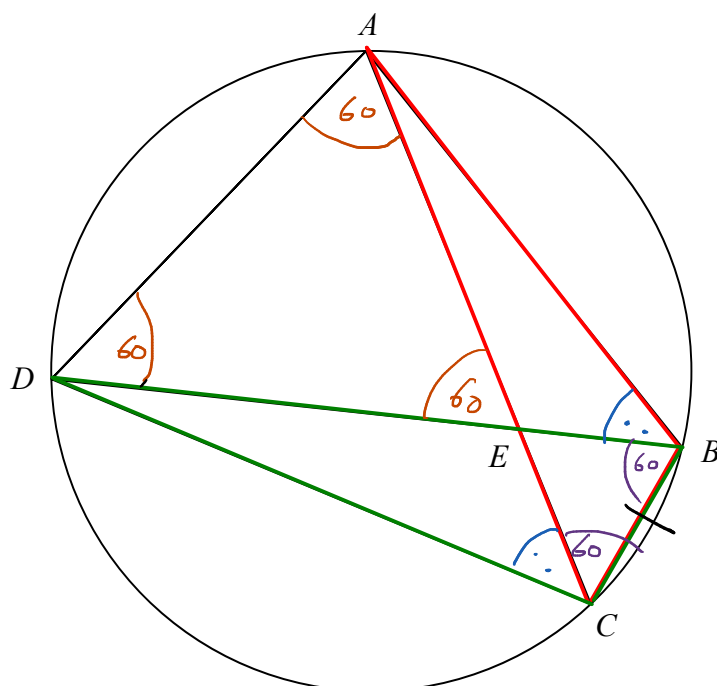


DO NOT WRITE IN THIS AREA

DO NOT WRITE IN THIS AREA

DO NOT WRITE IN THIS AREA

22  $A, B, C$  and  $D$  are four points on a circle.



$AEC$  and  $DEB$  are straight lines.

Triangle  $AED$  is an equilateral triangle.

Prove that triangle  $ABC$  is congruent to triangle  $DCB$ .

$BC$  is common to both triangles

Angle  $DAC = \text{Angle } ADB = \text{Angle } AED = 60^\circ$

Angles in an equilateral triangle

$$DAC = DBC = 60^\circ$$

Angles in the same segment are equal

$$ADB = ACB = 60^\circ$$

$$ACD = ABD$$

$$\therefore \text{Angle } DBC = \text{Angle } ACB \quad (\text{Both } 60^\circ)$$

$$\text{Angle } ABC = \text{Angle } BCD \quad \left[ \begin{array}{l} ACD = ABD \\ \therefore 60 + ACD = 60 + ABD \end{array} \right]$$

ASA

(Total for Question 22 is 4 marks)

TOTAL FOR PAPER IS 80 MARKS



DO NOT WRITE IN THIS AREA

DO NOT WRITE IN THIS AREA

DO NOT WRITE IN THIS AREA

**BLANK PAGE**



DO NOT WRITE IN THIS AREA

DO NOT WRITE IN THIS AREA

DO NOT WRITE IN THIS AREA

**BLANK PAGE**



DO NOT WRITE IN THIS AREA

DO NOT WRITE IN THIS AREA

DO NOT WRITE IN THIS AREA

**BLANK PAGE**

