

Please check the examination details below before entering your candidate information

Candidate surname

Other names

Centre Number

Candidate Number

--	--	--	--	--

--	--	--	--

## Pearson Edexcel Level 1/Level 2 GCSE (9–1)

Time 1 hour 30 minutes

Paper  
reference

**1MA1/3H**

### Mathematics PAPER 3 (Calculator) Higher Tier

**You must have:** Ruler graduated in centimetres and millimetres, protractor, pair of compasses, pen, HB pencil, eraser, calculator. Tracing paper may be used.

Total Marks

### Instructions

- Use **black** ink or ball-point pen.
- **Fill in the boxes** at the top of this page with your name, centre number and candidate number.
- Answer **all** questions.
- Answer the questions in the spaces provided – *there may be more space than you need.*
- You must **show all your working**.
- Diagrams are **NOT** accurately drawn, unless otherwise indicated.
- **Calculators may be used.**
- If your calculator does not have a  $\pi$  button, take the value of  $\pi$  to be 3.142 unless the question instructs otherwise.



### Information

- The total mark for this paper is 80
- The marks for **each** question are shown in brackets – *use this as a guide as to how much time to spend on each question.*

### Advice

- Read each question carefully before you start to answer it.
- Try to answer every question.
- Check your answers if you have time at the end.

Turn over ►

P64634A

©2021 Pearson Education Ltd.

E:1/1/1/1/1/1/1/



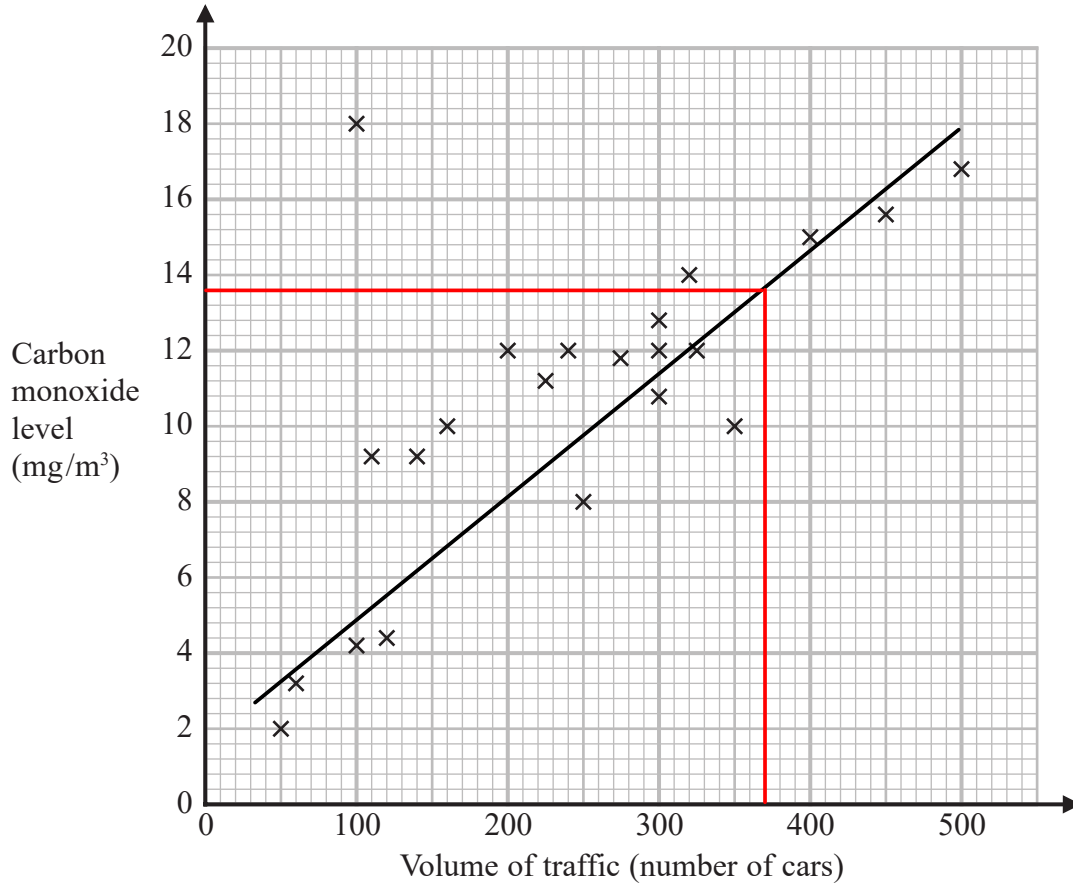
  
Pearson

Answer ALL questions.

Write your answers in the spaces provided.

You must write down all the stages in your working.

- 1 The scatter graph shows information about the volume of traffic and the carbon monoxide level at a point on a road each day for 22 days.



One point is an outlier.

- (a) Write down the coordinates of this point.

(100, 18)  
(1)

For another day, 370 cars pass the point on the road.

- (b) Estimate the carbon monoxide level for this day.

13.8 mg/m<sup>3</sup>  
12.8 to 14.8<sup>(2)</sup>



DO NOT WRITE IN THIS AREA

DO NOT WRITE IN THIS AREA

DO NOT WRITE IN THIS AREA

Alfie says,

“Because there is an outlier, there is no correlation.”

(c) Is Alfie correct?

You must give a reason for your answer.

*No. There is a positive correlation.*

(1)

(Total for Question 1 is 4 marks)



P 6 4 6 3 4 A 0 3 2 4

2 Natalie makes potato cakes in a restaurant.

She mixes potato, cheese and onion so that

weight of potato : weight of cheese : weight of onion = 9 : 2 : 1

Natalie needs to make 6000 g of potato cakes.

12 parts

Cheese costs £2.25 for 175 g.

Work out the cost of the cheese needed to make 6000 g of potato cakes.

$$\frac{6000}{12} = 500 \text{ g (each part)}$$

$$2 \times 500 = 1000 \text{ g (cheese)}$$

$$\frac{1000}{175} = 5.714\dots$$

$$5.714 \times 2.25 = \pounds 12.86$$

OR	$6 \times 2.25 = \pounds 13.50$
----	---------------------------------

£ 12.86

(Total for Question 2 is 4 marks)



DO NOT WRITE IN THIS AREA

DO NOT WRITE IN THIS AREA

DO NOT WRITE IN THIS AREA

3 (a) Write  $4.5 \times 10^5$  as an ordinary number.

$$\begin{array}{r} 450000 \\ \hline \end{array}$$

(1)

(b) Write 0.007 in standard form.

$$\begin{array}{r} 7 \times 10^{-3} \\ \hline \end{array}$$

(1)

(c) Work out  $4.2 \times 10^3 + 5.3 \times 10^2$   
Give your answer in standard form.

$$4730$$

$$\begin{array}{r} 4.73 \times 10^3 \\ \hline \end{array}$$

(2)

(Total for Question 3 is 4 marks)



- 4 A water tank is empty.  
Anil needs to fill the tank with 2400 litres of water.

Company **A** supplies water at a rate of 8 litres in 1 minute 40 seconds.

Company **B** supplies water at a rate of 2.2 gallons per minute.

1 gallon = 4.54 litres

Company **A** would take more time to fill the tank than Company **B** would take to fill the tank.

How much more time?

Give your answer in minutes correct to the nearest minute.

$$\text{A} // \quad 40 \text{ seconds} = \frac{2}{3} \text{ min}$$

$$1 + \frac{2}{3} = \frac{5}{3}$$

$$\frac{2400}{8} = 300$$

$$300 \times \frac{5}{3} = \underline{\underline{500 \text{ mins}}}$$

$$\text{B} // \quad 2.2 \text{ gallons}$$

$$2.2 \times 4.54 = 9.988$$

9.988 litres per min

$$\frac{2400}{9.988} = \underline{\underline{240.288 \text{ mins}}}$$

$$500 - 240 = \underline{\underline{260}}$$

..... 260 ..... minutes

(Total for Question 4 is 4 marks)



5 The first four terms of a Fibonacci sequence are

$$a \quad 2a \quad 3a \quad 5a \quad 8a$$

The sum of the first five terms of this sequence is 228

Work out the value of  $a$ .

$$a + 2a + 3a + 5a + 8a = 228$$

$$19a = 228$$

$$a = \frac{228}{19}$$

$$= 12$$

..... 12 .....

(Total for Question 5 is 3 marks)

DO NOT WRITE IN THIS AREA

DO NOT WRITE IN THIS AREA

DO NOT WRITE IN THIS AREA



P 6 4 6 3 4 A 0 7 2 4

- 6 In a bag there are only red counters, blue counters, green counters and pink counters. A counter is going to be taken at random from the bag.

The table shows the probabilities of taking a red counter or a blue counter.

Colour	red	blue	green	pink
Probability	0.05	0.15	$x + 0.2$ 0.5	$x$ 0.3

The probability of taking a green counter is 0.2 more than the probability of taking a pink counter.

- (a) Complete the table.

$$\begin{aligned}
 0.05 + 0.15 + x + 0.2 + x &= 1 \\
 2x + 0.4 &= 1 \\
 2x &= 0.6 \\
 x &= 0.3 \quad (2)
 \end{aligned}$$

There are 18 blue counters in the bag.

- (b) Work out the total number of counters in the bag.

$$\begin{aligned}
 0.15 \text{ of total} &= 18 \\
 0.15x &= 18 \\
 x &= \frac{18}{0.15}
 \end{aligned}$$

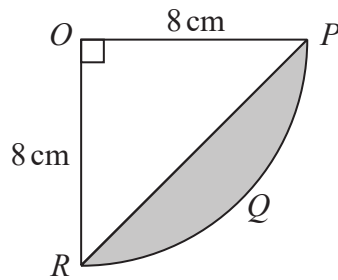
$$\begin{aligned}
 &\dots\dots\dots 120 \\
 &\quad\quad\quad (2)
 \end{aligned}$$

(Total for Question 6 is 4 marks)





- 7 The diagram shows a sector  $OPQR$  of a circle, centre  $O$  and radius 8 cm.



$OPR$  is a triangle.

Work out the area of the shaded segment  $PQR$ .

Give your answer correct to 3 significant figures.

$$\text{Area of } \frac{1}{4} \text{ circle} = \frac{\pi(8)^2}{4} = \underline{16\pi \text{ cm}^2}$$

$$\text{Area of triangle} = \frac{1}{2}(8)(8) = \underline{32 \text{ cm}^2}$$

$$16\pi - 32 = \underline{\underline{18.3 \text{ cm}^2}}$$

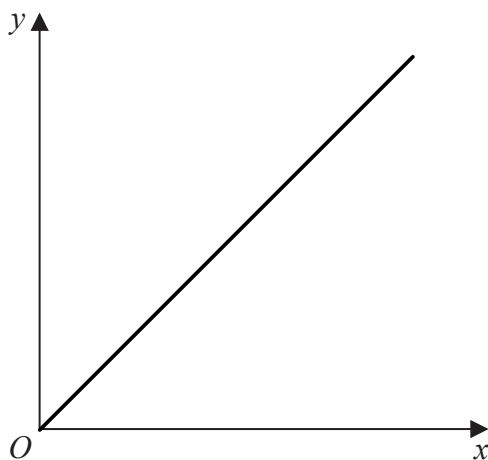
..... 18.3 .....  $\text{cm}^2$

(Total for Question 7 is 4 marks)



8 (a) Using the axes below, sketch a graph to represent the statement

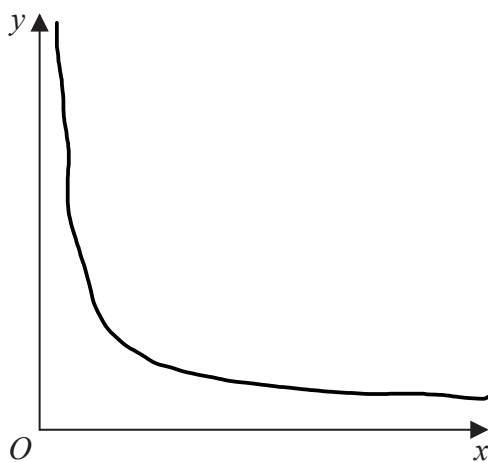
$y$  is directly proportional to  $x$



(1)

(b) Using the axes below, sketch a graph to represent the statement

$y$  is inversely proportional to  $x$



(1)

(Total for Question 8 is 2 marks)



DO NOT WRITE IN THIS AREA

DO NOT WRITE IN THIS AREA

DO NOT WRITE IN THIS AREA

9 On Monday, 12 people took 5 hours to clean a number of cars.  
On Tuesday, 15 people cleaned the same number of cars.

Assuming that all the people worked at the same rate,

(a) work out how many hours the 15 people took to clean the cars.

$$12 \times 5 = 60 \text{ (hours needed)}$$

$$\frac{60}{15} = 4$$

..... 4 ..... hours  
(2)

The assumption is wrong.

(b) How might this affect the time taken for the 15 people to clean the cars?

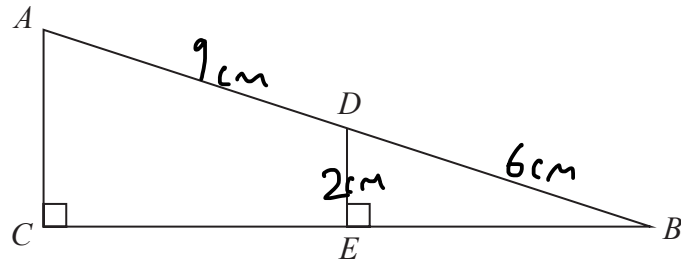
If the work at a faster rate it will take less than 4 hours. (And if they work at a slower rate it will take more than 4 hours)  
(1)

(Total for Question 9 is 3 marks)



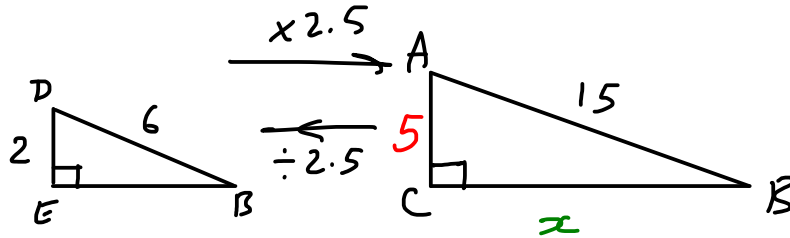
P 6 4 6 3 4 A 0 1 1 2 4

10 The diagram shows two right-angled triangles  $ACB$  and  $DEB$ .



$AD = 9 \text{ cm}$   
 $DE = 2 \text{ cm}$   
 $DB = 6 \text{ cm}$

Calculate the length of  $CB$ .  
 Give your answer correct to 2 decimal places.



$$\frac{15}{6} = 2.5$$

$$2 \times 2.5 = 5$$

$$x^2 + 5^2 = 15^2$$

$$x^2 = 15^2 - 5^2$$

$$x = \sqrt{15^2 - 5^2}$$

.....14.14..... cm

(Total for Question 10 is 4 marks)

DO NOT WRITE IN THIS AREA

DO NOT WRITE IN THIS AREA

DO NOT WRITE IN THIS AREA

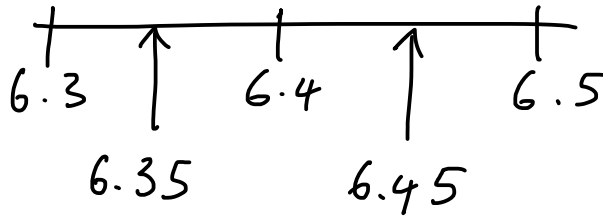


DO NOT WRITE IN THIS AREA

11 Freya writes down the value of  $x$ , correct to 1 decimal place.

She writes  $x = 6.4$

Complete the error interval for  $x$ .



$$6.35 \leq x < 6.45$$

(Total for Question 11 is 2 marks)

DO NOT WRITE IN THIS AREA

12  $(ax^6)^{\frac{1}{n}} = 7x^3$

Work out the value of  $a$  and the value of  $n$ .

$$a^{\frac{1}{n}} = 7 \quad (x^6)^{\frac{1}{n}} = x^3$$

$$x^{\frac{6}{n}} = x^3$$

$$\underline{\underline{n = 2}}$$

$$a^{\frac{1}{2}} = 7$$

$$a = 49$$

$$a = 49$$

$$n = 2$$

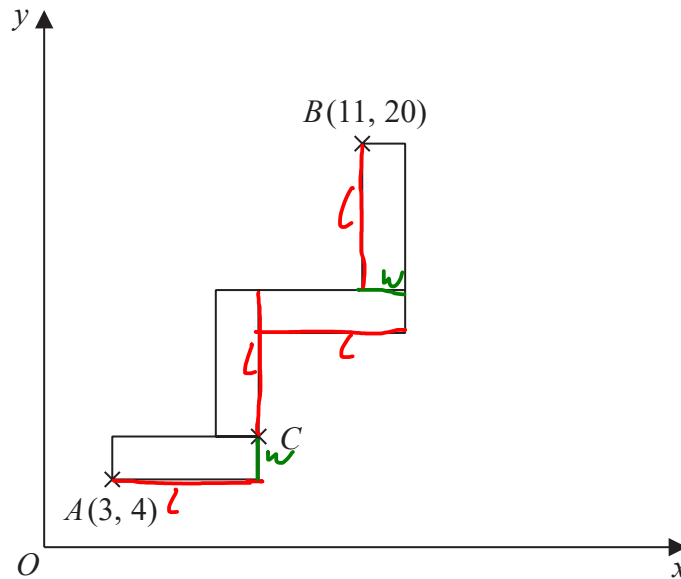
(Total for Question 12 is 2 marks)

DO NOT WRITE IN THIS AREA



P 6 4 6 3 4 A 0 1 3 2 4

- 13 A pattern is made from four identical rectangles.  
The sides of the rectangles are parallel to the axes.



Point  $A$  has coordinates  $(3, 4)$   
Point  $B$  has coordinates  $(11, 20)$   
Point  $C$  is marked on the diagram.

Work out the coordinates of  $C$ .  
You must show all your working.

$$\begin{aligned} \text{change in } y &= 20 - 4 \\ &= 16 \end{aligned}$$

$$2L + w = 16$$

$$\begin{aligned} \text{change in } x &= 11 - 3 \\ &= 8 \end{aligned}$$

$$2L - w = 8$$

$$2L + w = 16$$

$$2L - w = 8$$

$$\begin{aligned} 2w &= 8 \\ w &= 4 \end{aligned}$$

$$2L + 4 = 16$$

$$2L = 12$$

$$\underline{\underline{L = 6}}$$

$$\begin{aligned} C &: (3+6, 4+4) \\ & (9, 8) \end{aligned}$$

(..... 9 ..... , ..... 8 .....)

(Total for Question 13 is 5 marks)



14 Olivia and Jessica have in total half as many sweets as Fran and Gary have in total.

Fran and Gary share their sweets in the ratio 2:3

5 parts

Olivia and Jessica share their sweets in the ratio 9:1

10 parts

Fran got  $w$  sweets.

Gary got  $x$  sweets.

Olivia got  $y$  sweets.

Jessica got  $z$  sweets.

Find, in its simplest form,  $w:x:y:z$

$$F : G$$

$$O : J$$

$$2 : 3 \quad (5 \text{ parts})$$

$$9 : 1 \quad (10 \text{ parts})$$

$$4 : 6 \quad (10 \text{ parts})$$

$F$  &  $G$  Have Twice As Many

$$8 : 12 \quad (20 \text{ parts})$$

$$F : G : O : J$$

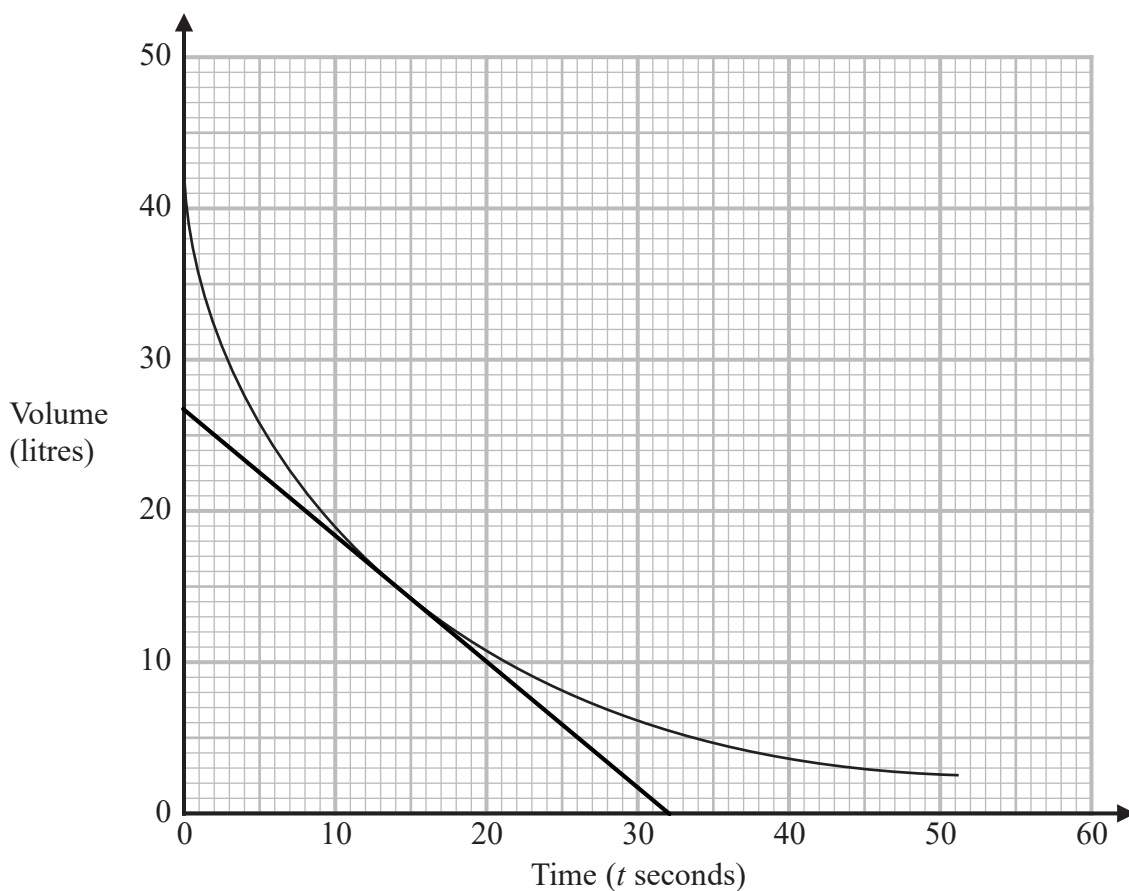
$$8 : 12 : 9 : 1$$

$$\underline{8 : 12 : 9 : 1}$$

(Total for Question 14 is 4 marks)



- 15 The graph gives the volume of water, in litres, in a container at time  $t$  seconds after the water started to flow out of the container.



Using the graph, work out an estimate for the rate at which the water is flowing out of the container when  $t = 12$   
You must show your working.

$$\frac{27}{32} = 0.84 \text{ L/s}$$

0.84 ..... litres per second  
 (0.7 to 1.)  
 (Total for Question 15 is 3 marks)





16 The curve C has equation  $y = x^2 + 3x - 3$

The line L has equation  $y - 5x + 4 = 0$

Show, algebraically, that C and L have exactly one point in common.

$$L \quad y = 5x - 4 \qquad C \quad y = x^2 + 3x - 3$$

Intersect where:

$$5x - 4 = x^2 + 3x - 3$$

$$0 = x^2 - 2x + 1$$

$$0 = (x - 1)^2$$

$$\underline{\underline{x = 1}}$$

There is only 1 solution  $\therefore$  only 1  
intersection

(Total for Question 16 is 4 marks)



P 6 4 6 3 4 A 0 1 7 2 4

- 17  $x$  is directly proportional to the square of  $y$ .  
 $y$  is directly proportional to the cube of  $z$ .

$$\underline{z = 2} \text{ when } \underline{x = 32}$$

Find a formula for  $x$  in terms of  $z$ .

$$x = ky^2 \quad y = az^3$$

$$x = k(az^3)^2$$

$$x = k(a^2z^6)$$

$$x = \boxed{ka^2}z^6$$

$\boxed{ka^2}$  is a constant (a number we need to work out)

when  $x = 32$   $z = 2$

$$32 = \boxed{ka^2}(2)^6$$

$$32 = 64\boxed{ka^2}$$

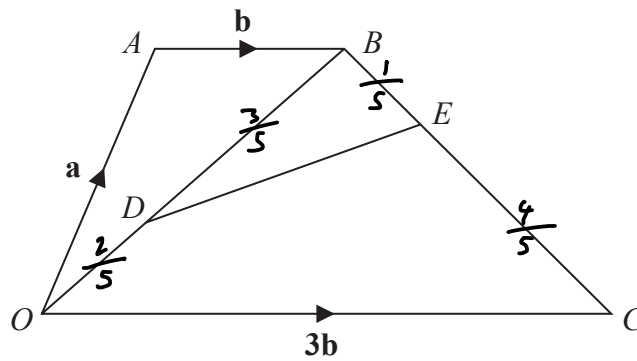
$$\frac{1}{2} = \boxed{ka^2}$$

$$x = \frac{1}{2}z^6$$

(Total for Question 17 is 4 marks)



18  $OABC$  is a trapezium.



$$\begin{aligned}\vec{OA} &= \mathbf{a} \\ \vec{AB} &= \mathbf{b} \\ \vec{OC} &= 3\mathbf{b}\end{aligned}$$

$D$  is the point on  $OB$  such that  $OD:DB = 2:3$   
 $E$  is the point on  $BC$  such that  $BE:EC = 1:4$

Work out the vector  $\vec{DE}$  in terms of  $\mathbf{a}$  and  $\mathbf{b}$ .  
 Give your answer in its simplest form.

$$\vec{OB} = \mathbf{a} + \mathbf{b} \quad \vec{BC} = -\mathbf{b} - \mathbf{a} + 3\mathbf{b} \\ = 2\mathbf{b} - \mathbf{a}$$

$$\begin{aligned}\vec{DE} &= \frac{3}{5}\vec{OB} + \frac{1}{5}\vec{BC} \\ &= \frac{3}{5}(\mathbf{a} + \mathbf{b}) + \frac{1}{5}(2\mathbf{b} - \mathbf{a}) \\ &= \frac{3}{5}\mathbf{a} + \frac{3}{5}\mathbf{b} + \frac{2}{5}\mathbf{b} - \frac{1}{5}\mathbf{a} \\ &= \underline{\underline{\frac{2}{5}\mathbf{a} + \mathbf{b}}}}\end{aligned}$$

$$\underline{\underline{\frac{2}{5}\mathbf{a} + \mathbf{b}}}}$$

(Total for Question 18 is 4 marks)



19 At the start of year  $n$ , the number of animals in a population is  $P_n$

At the start of the following year, the number of animals in the population is  $P_{n+1}$  where

$$P_{n+1} = kP_n$$

At the start of 2017 the number of animals in the population was 4000

At the start of 2019 the number of animals in the population was 3610

Find the value of the constant  $k$ .

$$\begin{aligned} P_{2018} &= k(4000) \\ &= 4000k \end{aligned}$$

$$P_{2019} = k(4000k)$$

$$3610 = 4000k^2$$

$$\frac{361}{400} = k^2$$

$$k = \sqrt{\frac{361}{400}}$$

$$= 0.95$$

0.95

(Total for Question 19 is 3 marks)

20 Pat throws a fair coin  $n$  times.

Find an expression, in terms of  $n$ , for the probability that Pat gets at least 1 head and at least 1 tail.

1 time  $P(H) = \frac{1}{2}$

$$P(T) = \frac{1}{2}$$

2 times  $P(HH) = \frac{1}{2} \times \frac{1}{2} = \frac{1}{4}$   $1 - \frac{1}{4} - \frac{1}{4} = \frac{1}{2}$

$$P(TT) = \frac{1}{2} \times \frac{1}{2} = \frac{1}{4}$$

3 times  $P(HHH) = \frac{1}{2} \times \frac{1}{2} \times \frac{1}{2} = \frac{1}{8}$   $1 - \frac{1}{8} - \frac{1}{8} = \frac{6}{8}$

$$P(TTT) = \frac{1}{2} \times \frac{1}{2} \times \frac{1}{2} = \frac{1}{8}$$

$n$  times  $P(\text{All heads}) = \left(\frac{1}{2}\right)^n$   $1 - 2\left(\frac{1}{2}\right)^n$

$$P(\text{All tails}) = \left(\frac{1}{2}\right)^n$$

(Total for Question 20 is 2 marks)

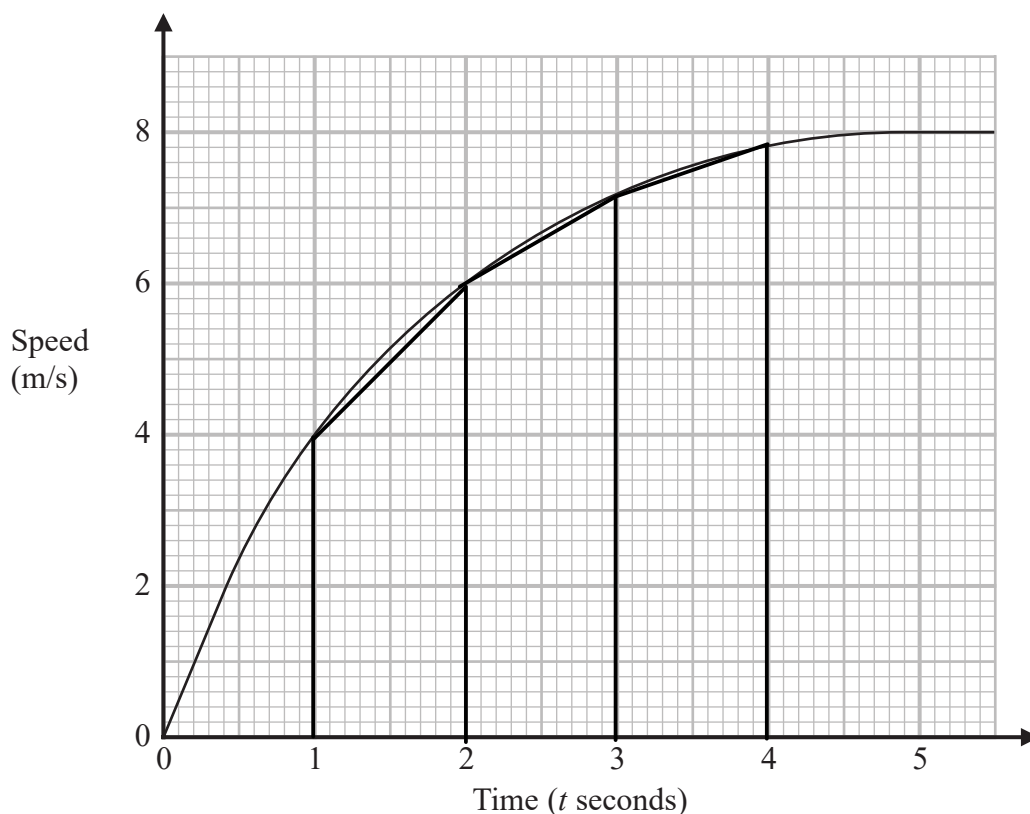


DO NOT WRITE IN THIS AREA

DO NOT WRITE IN THIS AREA

DO NOT WRITE IN THIS AREA

- 21 Here is a speed-time graph showing the speed, in metres per second, of an object  $t$  seconds after it started to move from rest.



- (a) Using 3 trapeziums of equal width, work out an estimate for the area under the graph between  $t = 1$  and  $t = 4$

$$1 \times \frac{4 + 6}{2} = 5$$

$$1 \times \frac{6 + 7.2}{2} = 6.6$$

$$1 \times \frac{7.2 + 7.8}{2} = 7.5$$

$$5 + 6.6 + 7.5 = 19.1$$

19.1

(3)

- (b) What does this area represent?

The distance travelled (between 1 and 4 seconds)

(1)

(Total for Question 21 is 4 marks)



22 Show that  $\frac{6x^3}{(9x^2 - 144)} \cdot \frac{2x^4}{3(x-4)}$  can be written in the form  $\frac{1}{x(x+r)}$  where  $r$  is an integer.

$$\frac{6x^3}{(3x+12)(3x-12)} \times \frac{3(x-4)}{2x^4}$$

$$\frac{6x^3}{3(x+4) \cdot 3(x-4)} \times \frac{3(x-4)}{2x^4}$$

$$\frac{6x^3}{9(x+4)(x-4)} \times \frac{3(x-4)}{2x^4}$$

$$\frac{\cancel{18}x^{\cancel{3}}(\cancel{x-4})}{\cancel{18}x^4(\cancel{x-4})(x+4)}$$

$$\frac{1}{x(x+4)}$$

(Total for Question 22 is 3 marks)

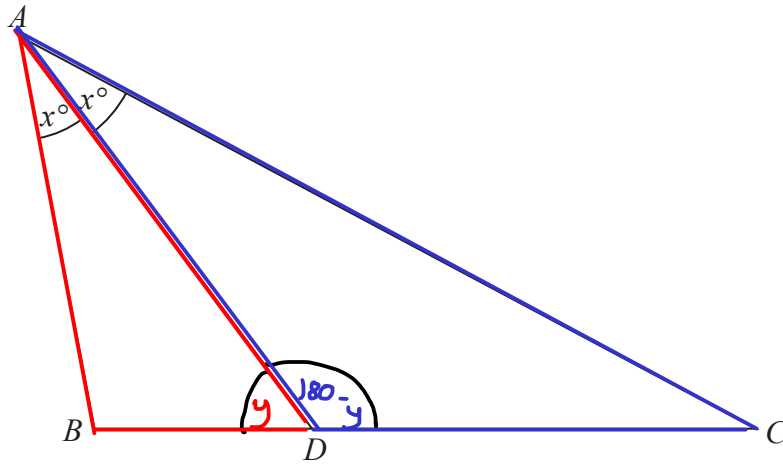
DO NOT WRITE IN THIS AREA

DO NOT WRITE IN THIS AREA

DO NOT WRITE IN THIS AREA



23  $ABC$  is a triangle.



$D$  is the point on  $BC$  such that angle  $BAD =$  angle  $DAC = x^\circ$

$$\sin(y) = \sin(180 - y)$$

Prove that  $\frac{AB}{BD} = \frac{AC}{DC}$

$$\frac{BD}{\sin x} = \frac{AB}{\sin y}$$

$$\frac{\sin y}{\sin x} = \frac{AB}{BD}$$

$$\frac{DC}{\sin x} = \frac{AC}{\sin(180 - y)}$$

$$\frac{\sin(180 - y)}{\sin x} = \frac{AC}{DC}$$

as  $\sin(180 - y) = \sin y$

$$\frac{\sin y}{\sin x} = \frac{AC}{DC}$$

$$\frac{\sin y}{\sin x} = \frac{AC}{DC} = \frac{AB}{BD}$$

(Total for Question 23 is 4 marks)

TOTAL FOR PAPER IS 80 MARKS



DO NOT WRITE IN THIS AREA

DO NOT WRITE IN THIS AREA

DO NOT WRITE IN THIS AREA

**BLANK PAGE**

